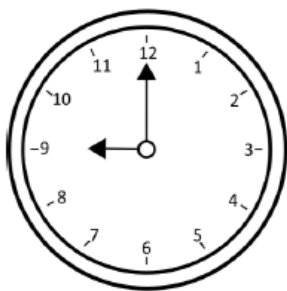
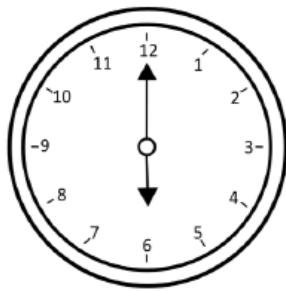


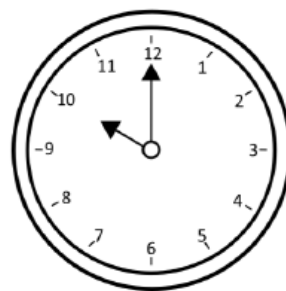
1. Odczytaj i zapisz, którą godzinę wskazuje każdy zegar.



.... : 00

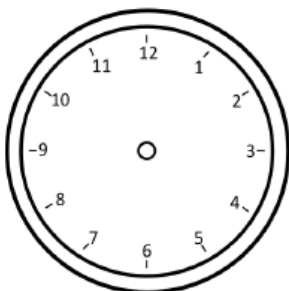


.... : 00

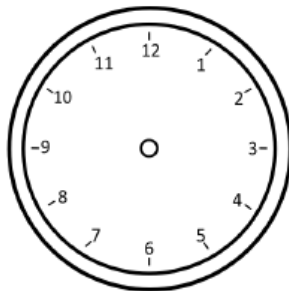


.... : 00

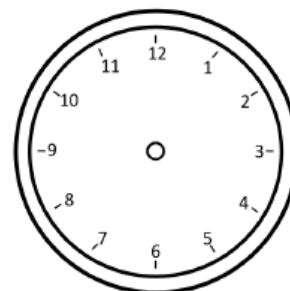
2. Zaznacz na zegarach podane godziny.



7 : 00



4 : 00



8 : 00

3. Narysuj wskazówki tak, aby były zgodne z poleceniami nad strzałkami.

