

1. Policz, ile jest zabawek na każdej półce i wpisz liczbę.




2. Napisz, ile widzisz misiów, lalek, pacynek i wózków?

kukieki		
misie		
lalki		
wózek		

3. Wstaw odpowiedni znak: <, >, =.



2	1
---	---




4	4
---	---




3	4
---	---




2	4
---	---




3	2
---	---



1	4
---	---



4	2
---	---



3	3
---	---

